

This booklet contains 24 printed pages.

PAPER - 1 : MATHEMATICS, PHYSICS & CHEMISTRY

Test Booklet Code

Do not open this Test Booklet until you are asked to do so.

Read carefully the Instructions on the Back Cover of this Test Booklet.

G**Important Instructions :**

Maths By Suhag




1. Immediately fill in the particulars on this page of the Test Booklet with *only Blue / Black Ball Point Pen* provided by the Board.
2. The Answer Sheet is kept inside this Test Booklet. When you are directed to open the Test Booklet, take out the Answer Sheet and fill in the particulars carefully. www.MathsBySuhag.com
Ph. : (0755)-32 00 000
3. The test is of **3 hours** duration.
4. The Test Booklet consists of **90** questions. The maximum marks are **360**. www.TekoClasses.com
5. There are *three* parts in the question paper A, B, C consisting of **Mathematics, Physics and Chemistry** having 30 questions in each part of equal weightage. Each question is allotted **4 (four)** marks for each correct response.
6. *Candidates will be awarded marks as stated above in instruction No. 5 for correct response of each question. $\frac{1}{4}$ (one fourth) marks will be deducted for indicating incorrect response of each question. No deduction from the total score will be made if no response is indicated for an item in the answer sheet.*
7. There is only one correct response for each question. Filling up more than one response in each question will be treated as wrong response and marks for wrong response will be deducted accordingly as per instruction 6 above.
8. For writing particulars/markings responses on *Side-1* and *Side-2* of the Answer Sheet use *only Blue/Black Ball Point Pen* provided by the Board.
9. No candidate is allowed to carry any textual material, printed or written, bits of papers, pager, mobile phone, any electronic device, etc. except the Admit Card inside the examination room/hall.
10. Rough work is to be done on the space provided for this purpose in the Test Booklet only. This space is given at the bottom of each page and in **three** pages (Pages **21 - 23**) at the end of the booklet.
11. On completion of the test, the candidate must hand over the Answer Sheet to the Invigilator on duty in the Room/Hall. *However, the candidates are allowed to take away this Test Booklet with them.*
12. The CODE for this Booklet is **G**. Make sure that the CODE printed on *Side-2* of the Answer Sheet and also tally the serial number of the Test Booklet and Answer Sheet are the same as that on this booklet. In case of discrepancy, the candidate should immediately report the matter to the Invigilator for replacement of both the Test Booklet and the Answer Sheet.
13. **Do not fold or make any stray mark on the Answer Sheet.**

Name of the Candidate (in Capital letters): RAJA BHARGAVRoll Number : in figures

1	5	2	0	4	3	5	5
---	---	---	---	---	---	---	---

: in words ONE (ONE) FIFTY TWO THOUSAND ONE THOUSAND THREE HUNDRED FIFTY FIVEExamination Centre Number:

1	5	2	0	0	5
---	---	---	---	---	---

Name of Examination Centre (in Capital letters): JAWAHAR LAL NEHRU SCHOOLCandidate's Signature: 1. Invigilator's Signature: 2. Invigilator's Signature: 

SEAL

PART A – MATHEMATICS

1. A value of θ for which $\frac{2+3i \sin\theta}{1-2i \sin\theta}$ is purely imaginary, is :

(1) $\sin^{-1}\left(\frac{1}{\sqrt{3}}\right)$ $\frac{2+3i \sin\theta}{1-2i \sin\theta}$

(2) $\frac{\pi}{3}$

(3) $\frac{\pi}{6}$

(4) $\sin^{-1}\left(\frac{\sqrt{3}}{4}\right)$

2. The system of linear equations

$$x + \lambda y - z = 0$$

$$\lambda x - y - z = 0$$

$$x + y - \lambda z = 0$$

$$\begin{vmatrix} 1 & \lambda & -1 \\ \lambda & -1 & -1 \\ 1 & 1 & -\lambda \end{vmatrix} = 0$$

has a non-trivial solution for :

- (1) exactly three values of λ .
- (2) infinitely many values of λ .
- (3) exactly one value of λ .
- (4) exactly two values of λ .

3. A wire of length 2 units is cut into two parts which are bent respectively to form a square of side = x units and a circle of radius = r units. If the sum of the areas of the square and the circle so formed is minimum, then :

(1) $2x = r$

(2) $2x = (\pi + 4)r$

(3) $(4 - \pi)x = \pi r$

(4) $x = 2r$

$\frac{d}{dx} (x^2 + \pi r^2) = 0$
 $2x = 2\pi r$
 $x = \pi r$

4. A man is walking towards a vertical pillar in a straight path, at a uniform speed. At a certain point A on the path, he observes that the angle of elevation of the top of the pillar is 30° . After walking for 10 minutes from A in the same direction, at a point B, he observes that the angle of elevation of the top of the pillar is 60° . Then the time taken (in minutes) by him, from B to reach the pillar, is :

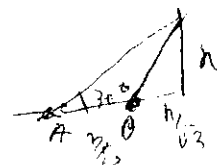
(1) 5

(2) 6

(3) 10

(4) 20

$\frac{10}{2} = 5$



$h(\sqrt{3} - \frac{1}{\sqrt{3}}) = v \times 10$

$\frac{h}{\sqrt{3}} = v \times t$

$\frac{h}{\sqrt{3}} = v \times 5$

Maths By Suhag

www.MathsBySuhag.com
 Pn : (0755)-32 00 000
 www.IekoClasses.com

5. Let two fair six-faced dice A and B be thrown simultaneously. If E_1 is the event that die A shows up four, E_2 is the event that die B shows up two, and E_3 is the event that the sum of numbers on both dice is odd, then which of the following statements is NOT true ?

(1) E_1, E_2 and E_3 are independent

(2) E_1 and E_2 are independent

(3) E_2 and E_3 are independent

(4) E_1 and E_3 are independent

$x^2 + \pi(2-x)^2$
 $\frac{d}{dx} (x^2 + \pi(2-x)^2) = 0$
 $2x + 2\pi(2-x)(-1) = 0$
 $2x - 2\pi(2-x) = 0$
 $x - \pi(2-x) = 0$
 $x - 2\pi + \pi x = 0$
 $x(1 + \pi) = 2\pi$
 $x = \frac{2\pi}{1 + \pi}$

6. If the standard deviation of the numbers 2, 3, a and 11 is 3.5, then which of the following is true?

- (1) $3a^2 - 23a + 44 = 0$
 (2) $3a^2 - 26a + 55 = 0$
 (3) $3a^2 - 32a + 84 = 0$
 (4) $3a^2 - 34a + 91 = 0$

$12a = a^2$

$4b^2 - a^2 = 2b^2$
 $a^2 e^2 = a^2$
 $b^2 = a^2$

7. For $x \in \mathbb{R}$, $f(x) = \log|2 - \sin x|$ and $g(x) = f(f(x))$, then:

- (1) g is differentiable at $x=0$ and $g'(0) = -\sin(\log 2)$
 (2) g is not differentiable at $x=0$
 (3) $g'(0) = \cos(\log 2)$
 (4) $g'(0) = -\cos(\log 2)$



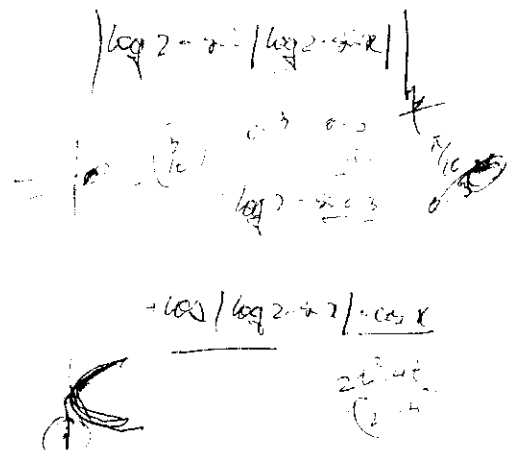
8. The distance of the point (1, -5, 9) from the plane $x - y + z = 5$ measured along the line $x = y = z$ is:

- (1) $\frac{20}{3}$
 (2) $3\sqrt{10}$
 (3) $10\sqrt{3}$
 (4) $\frac{10}{\sqrt{3}}$

$x = y = z = \lambda$
 $2\lambda - 4\lambda = 5$
 $-2\lambda = 5 \Rightarrow \lambda = -\frac{5}{2}$
 $\sqrt{(1 + 4\lambda)^2 + (-5 - 4\lambda)^2 + (9 - 4\lambda)^2}$
 $\sqrt{1 + 4(-\frac{5}{2})^2 + (-5 - 4(-\frac{5}{2}))^2 + (9 - 4(-\frac{5}{2}))^2}$
 $\sqrt{1 + 50 + 1 + 100 + 1 + 100} = \sqrt{203}$

9. The eccentricity of the hyperbola whose length of the latus rectum is equal to 8 and the length of its conjugate axis is equal to half of the distance between its foci, is:

- (1) $\sqrt{3}$
 (2) $\frac{4}{3}$
 (3) $\frac{4}{\sqrt{3}}$
 (4) $\frac{2}{\sqrt{3}}$



10. Let P be the point on the parabola, $y^2 = 8x$ which is at a minimum distance from the centre C of the circle, $x^2 + (y + 6)^2 = 1$. Then the equation of the circle, passing through C and having its centre at P is:

- (1) $x^2 + y^2 - 4x + 9y + 18 = 0$
 (2) $x^2 + y^2 - 4x + 8y + 12 = 0$
 (3) $x^2 + y^2 - x + 4y - 12 = 0$
 (4) $x^2 + y^2 - \frac{x}{4} + 2y - 24 = 0$

$4x^2 + 4y^2 + 12x + 9$
 $4x^2 + 12x + 9$

11. If $A = \begin{bmatrix} 5a & -b \\ 3 & 2 \end{bmatrix}$ and $A \text{ adj } A = A A^T$, then

$5a + b$ is equal to:

- (1) 13
 (2) -1
 (3) 5
 (4) 4

$\begin{bmatrix} 2 & b \\ -3 & 5a \end{bmatrix} \begin{bmatrix} 2 & b \\ -3 & 5a \end{bmatrix} = \begin{bmatrix} 2a & 3 \\ -b & 2 \end{bmatrix}$
 $4 - 3b = 2a$
 $-15a + 15b = 2a$
 $13a = 15b$
 $5a + b = 4$

$2 = \frac{2}{4\pi + 1}$
 $\left(\frac{8\pi}{4\pi + 1}\right)$

$\frac{2 \times 2}{4\pi + 1}$

$2 = 2 - 4x$

$2\pi x = 2 - 4x$
 $\pi x = 1 - 2x$
 $\pi x = 1 - \frac{x}{2\pi}$

12. Consider

$$f(x) = \tan^{-1} \left(\sqrt{\frac{1 + \sin x}{1 - \sin x}} \right), x \in \left(0, \frac{\pi}{2} \right).$$

A normal to $y=f(x)$ at $x = \frac{\pi}{6}$ also passes through the point :

(1) $\left(\frac{\pi}{4}, 0 \right)$

(2) $(0, 0)$

(3) $\left(0, \frac{2\pi}{3} \right)$

(4) $\left(\frac{\pi}{6}, 0 \right)$

$\frac{2}{6}, \frac{\sqrt{3}}{3}$
 $(\frac{\pi}{4}, 0)$
 $\frac{1}{1 + (\sin \frac{\pi}{6})^2}$
 $\frac{1}{1 + (\frac{1}{2})^2} = \frac{4}{5}$
 $\frac{1}{4} = \frac{2}{3}$
 $\left(\frac{y}{x} = \frac{2}{3} \right) = -4 \left(x - \frac{\pi}{6} \right)$
 $\frac{2}{3} = -4 \left(x - \frac{\pi}{6} \right)$

14. If a curve $y=f(x)$ passes through the point $(1, -1)$ and satisfies the differential equation, $y(1+xy) dx = x dy$, then $f\left(-\frac{1}{2}\right)$ is equal to :

(1) $\frac{4}{5}$
 $\frac{dy}{dx} = \frac{y}{x(1+xy)}$
 $xy = \frac{1}{t}$
 $= t + \frac{dt}{dt}$

(2) $-\frac{2}{5}$
 $t + \frac{dt}{dt} = t(1 + \frac{1}{t^2})$

(3) $-\frac{4}{5}$
 $\frac{dt}{dt} = t^2 t^2$
 $\frac{dt}{t} = \frac{2}{3} + \frac{2}{3}$

(4) $\frac{2}{5}$
 $\frac{1}{t} = \frac{1}{3} + C$
 $\frac{1}{24} = \frac{-1}{24} + \frac{16}{24} = \frac{15}{24}$

13. Two sides of a rhombus are along the lines, $x-y+1=0$ and $7x-y-5=0$. If its diagonals intersect at $(-1, -2)$, then which one of the following is a vertex of this rhombus ?

(1) $\left(-\frac{10}{3}, -\frac{7}{3} \right)$

(2) $(-3, -9)$

(3) $(-3, -8)$

(4) $\left(\frac{1}{3}, -\frac{8}{3} \right)$

www.byjus.com
 BYJU'S
 P.N. Classes.com
 www.pnclasses.com

15. If all the words (with or without meaning) having five letters, formed using the letters of the word SMALL and arranged as in a dictionary; then the position of the word SMALL is :

(1) 58th

(2) 46th

(3) 59th

(4) 52nd

A L M S
 $A \frac{4!}{1!} = 24$
 $L \frac{4!}{1!} = 24$
 $M = 12$
 $S = 3$
 $SMALL = 6$
 SMALL =

16. If the 2nd, 5th and 9th terms of a non-constant A.P. are in G.P., then the common ratio of this G.P. is :

- (1) $\frac{1}{4}$
- (2) $\frac{x}{5}$
- (3) $\frac{4}{3}$
- (4) 1

$a, a+d, a+4d, a+8d$
 $a+4d = \sqrt{(a)(a+8d)}$
 $a^2 + 8ad + 16d^2 = a^2 + 8ad$
 $16d^2 = 0$
 $d = 0$
 $\frac{a+4d}{a} = \frac{a}{a}$
 $\frac{a+4d}{a} = 1$

17. If the number of terms in the expansion of $(1 - \frac{2}{x} + \frac{4}{x^2})^n$, $x \neq 0$, is 28, then the sum of the coefficients of all the terms in this expansion, is :

- (1) 729
- (2) 64
- (3) 2187
- (4) 243

$2n+1 = 28$
 $2n = 27$
 $n = 13.5$
 $n = 14$
 $2n+1 = 29$
 $2n = 28$
 $n = 14$
 $2n+1 = 29$
 $2n = 28$
 $n = 14$
 $2n+1 = 29$
 $2n = 28$
 $n = 14$
 $2n+1 = 29$
 $2n = 28$
 $n = 14$

18. If the sum of the first ten terms of the series $(1\frac{3}{5})^2 + (2\frac{2}{5})^2 + (3\frac{1}{5})^2 + 4^2 + \dots$ is $\frac{16}{5} m$, then m is equal to :

- (1) 99
- (2) 102
- (3) 101
- (4) 100

$\sum_{k=1}^n (k + \frac{3}{5})^2$
 $\sum_{k=1}^n (k^2 + \frac{6k}{5} + \frac{9}{25})$
 $\frac{n(n+1)(2n+1)}{6} + \frac{6n(n+1)}{10} + \frac{9n}{25}$
 $\frac{n(n+1)(2n+1)}{6} + \frac{3n(n+1)}{5} + \frac{9n}{25}$
 $\frac{n(n+1)(2n+1)}{6} + \frac{6n(n+1)}{10} + \frac{9n}{25}$
 $\frac{n(n+1)(2n+1)}{6} + \frac{3n(n+1)}{5} + \frac{9n}{25}$

19. If the line, $\frac{x-3}{2} = \frac{y+2}{-1} = \frac{z+4}{3}$ lies in the plane, $lx + my - z = 9$, then $l^2 + m^2$ is equal to :

- (1) 2
- (2) 26
- (3) 18
- (4) 5

$3d - 2m + 4 = 9$
 $3d - 2m = 5$
 $3d - 2m = 5$
 $4d = 8d^2$
 $d = 8d$
 $2d - m - 3 = 0$
 $2d = m + 3$
 $3d - 2m = 5$
 $4d - 2m = 6$
 $d = 1$
 $m = -1$
 $l^2 + m^2 = 1^2 + (-1)^2 = 2$

20. The Boolean Expression $(p \wedge \sim q) \vee q \vee (\sim p \wedge q)$ is equivalent to :

- (1) $p \vee \sim q$
- (2) $\sim p \wedge q$
- (3) $p \wedge q$
- (4) $p \vee q$

$\frac{16}{5} \left(\frac{n(n+1)(2n+1)}{6} + \frac{2(n+1)}{2} + n \right)$
 $\frac{16}{5} \left(\frac{n(n+1)(2n+1)}{6} + (n+1) + n \right)$
 $\frac{16}{5} \left(\frac{n(n+1)(2n+1)}{6} + 2n + 1 \right)$
 $\frac{16}{5} (77 + 22 + 2)$

www.MathsBySuhag.com
 Ph. (0755)-32 00 000
www.TekoClasses.com

21. The integral $\int \frac{2x^{12} + 5x^9}{(x^5 + x^3 + 1)^3} dx$ is equal

to :

(1) $\frac{-x^{10}}{2(x^5 + x^3 + 1)^2} + C$

(2) $\frac{-x^5}{(x^5 + x^3 + 1)^2} + C$

(3) $\frac{x^{10}}{2(x^5 + x^3 + 1)^2} + C$

(4) $\frac{x^5}{2(x^5 + x^3 + 1)^2} + C$

www.MathsBySuhag.com
 P.O. 07557-32 00 000
 www.mathsbySuhag.com

where C is an arbitrary constant.

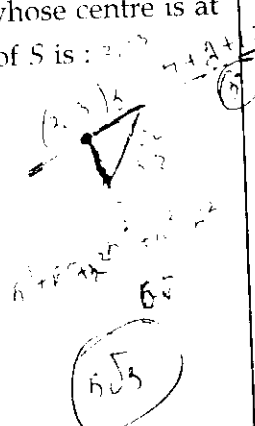
22. If one of the diameters of the circle, given by the equation, $x^2 + y^2 - 4x + 6y - 12 = 0$, is a chord of a circle S, whose centre is at $(-3, 2)$, then the radius of S is :

(1) 10

(2) $5\sqrt{2}$

(3) $5\sqrt{3}$

(4) 5



23. $\lim_{n \rightarrow \infty} \left(\frac{(n+1)(n+2) \dots 3n}{n^{2n}} \right)^{\frac{1}{n}}$ is equal to :

(1) $3 \log 3 - 2$

(2) $\frac{18}{e^4}$

(3) $\frac{27}{e^2}$

(4) $\frac{9}{e^2}$

$\frac{1}{2} \frac{x^{10}}{(x^5 + x^3 + 1)}$

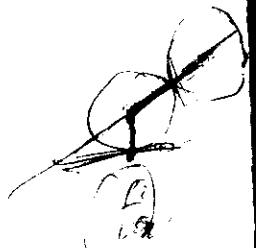
24. The centres of those circles which touch the circle, $x^2 + y^2 - 8x - 8y - 4 = 0$, externally and also touch the x-axis, lie on :

(1) a parabola.

(2) a circle.

(3) an ellipse which is not a circle.

(4) a hyperbola.



25. Let \vec{a} , \vec{b} and \vec{c} be three unit vectors such that $\vec{a} \times (\vec{b} \times \vec{c}) = \frac{\sqrt{3}}{2} (\vec{b} + \vec{c})$. If \vec{b} is not parallel to \vec{c} , then the angle between \vec{a} and \vec{b} is:

- (1) $\frac{5\pi}{6}$
- (2) $\frac{3\pi}{4}$
- (3) $\frac{\pi}{2}$
- (4) $\frac{2\pi}{3}$

www.MathsBySuhag.com
 P.N. (0755)-32 00 000
 www.IekoClasses.com

$\vec{a} \cdot (\vec{b} \times \vec{c}) = \sqrt{3} \frac{b \cdot c}{2}$
 $\Rightarrow \sin \theta = \frac{\sqrt{3}}{2} \cos \phi$
 $\Rightarrow \theta = \frac{\pi}{2} - \phi$
 $\Rightarrow \theta = \frac{\pi}{2} - \frac{\pi}{3} = \frac{\pi}{3}$

26. Let $p = \lim_{x \rightarrow 0^+} (1 + \tan^2 \sqrt{x})^{\frac{1}{2x}}$ then $\log p$ is equal to:

- (1) $\frac{1}{4}$
- (2) 2
- (3) 1
- (4) $\frac{1}{2}$

$\lim_{x \rightarrow 0^+} \frac{\ln(1 + \tan^2 \sqrt{x})}{2x}$
 $\frac{0}{0}$ form
 $\frac{2 \tan \sqrt{x} \cdot \sec^2 \sqrt{x} \cdot \frac{1}{2\sqrt{x}}}{2}$
 $\frac{\tan \sqrt{x} \cdot \sec^2 \sqrt{x}}{\sqrt{x}}$
 $\frac{1 \cdot 2}{1} = 2$

27. If $0 \leq x < 2\pi$, then the number of real values of x , which satisfy the equation $\cos x + \cos 2x + \cos 3x + \cos 4x = 0$, is:

- (1) 9
- (2) 3
- (3) 5
- (4) 7

$2 \cos 2x \cos x + 2 \cos 2x \cos 3x = 0$
 $2 \cos 2x (\cos x + \cos 3x) = 0$
 $\cos 2x = 0 \Rightarrow 2x = \frac{\pi}{2}, \frac{3\pi}{2}$
 $x = \frac{\pi}{4}, \frac{3\pi}{4}, \frac{5\pi}{4}, \frac{7\pi}{4}$
 $\cos x + \cos 3x = 0 \Rightarrow \cos x + \cos 3x = 2 \cos 2x \cos x = 0$
 $\cos x = 0 \Rightarrow x = \frac{\pi}{2}, \frac{3\pi}{2}$
 $\cos 2x = 0 \Rightarrow x = \frac{\pi}{4}, \frac{3\pi}{4}, \frac{5\pi}{4}, \frac{7\pi}{4}$
 Total solutions: 9

28. The sum of all real values of x satisfying the equation

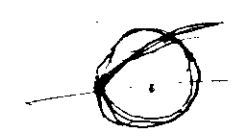
$(x^2 - 5x + 5)^{x^2 + 4x - 60} = 1$ is:

- (1) 5
- (2) 3
- (3) -4
- (4) 6

$x^2 - 5x + 5 = 1$
 $x^2 - 5x + 4 = 0$
 $(x-1)(x-4) = 0$
 $x = 1, 4$

29. The area (in sq. units) of the region $\{(x, y) : y^2 \geq 2x \text{ and } x^2 + y^2 \leq 4x, x \geq 0, y \geq 0\}$ is:

- (1) $\frac{\pi}{2} - \frac{2\sqrt{2}}{3}$
- (2) $\pi - \frac{4}{3}$
- (3) $\pi - \frac{8}{3}$
- (4) $\pi - \frac{4\sqrt{2}}{3}$



$x^2 + y^2 = 4x \Rightarrow x^2 - 4x + y^2 = 0$
 $(x-2)^2 + y^2 = 4$
 Circle center (2,0) radius 2.
 $y^2 = 2x$
 Parabola opening right.
 Intersection: $x^2 + 2x = 4x \Rightarrow x^2 - 2x = 0 \Rightarrow x(x-2) = 0$
 $x = 0, 2$
 Area = $\int_0^2 (\sqrt{2x} - \sqrt{4-x}) dx$

30. If $f(x) + 2f\left(\frac{1}{x}\right) = 3x, x \neq 0$, and $f(-1) + 2f(1) = -3$
 $S = \{x \in \mathbb{R} : f(x) = f(-x)\}$; then S:

- (1) contains more than two elements.
- (2) is an empty set.
- (3) contains exactly one element.
- (4) contains exactly two elements.

$f(x) + 2f\left(\frac{1}{x}\right) = 3x$
 $f\left(\frac{1}{x}\right) + 2f(x) = \frac{3}{x}$
 $f(x) = \frac{3x^2 - 3}{x^2 - 1}$
 $f(x) = f(-x)$
 $\frac{3x^2 - 3}{x^2 - 1} = \frac{3x^2 - 3}{x^2 - 1}$
 Always true for $x \neq \pm 1$.
 At $x = 1, -1$, the function is undefined.
 So S is an empty set.

$\frac{5x}{6} = \frac{2}{x}$

$x = \frac{\sqrt{2}}{5}$

$\frac{3\sqrt{2}}{5}$

$\frac{2\sqrt{2}}{5}$

$\frac{8x}{2} = \frac{3x}{2}$
 $4x = \frac{3x}{2}$
 $8x = 3x$
 $5x = 0$
 $x = 0$

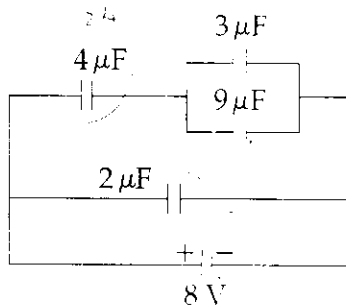
$x = \frac{\sqrt{2}}{5}, \frac{3\sqrt{2}}{5}, \frac{2\sqrt{2}}{5}$
 $x = \frac{\sqrt{2}}{5}, \frac{3\sqrt{2}}{5}$

PART B – PHYSICS

ALL THE GRAPHS GIVEN ARE SCHEMATIC AND NOT DRAWN TO SCALE.

31. A combination of capacitors is set up as shown in the figure. The magnitude of the electric field, due to a point charge Q (having a charge equal to the sum of the charges on the $4\ \mu\text{F}$ and $9\ \mu\text{F}$ capacitors), at a point distant $30\ \text{m}$ from it, would equal :

$(1) \rightarrow 3$
 $(2) \rightarrow 12$
 $(3) \rightarrow 12$
 $(4) \rightarrow 12$



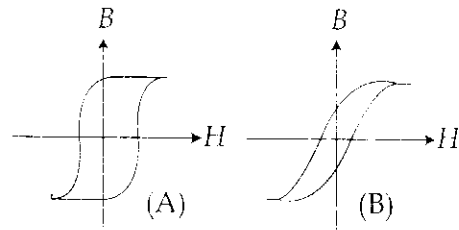
$4 \times 12 = 48$
 $9 \times 12 = 108$
 $48 + 108 = 156$
 $156 \times 10^{-6} = 1.56 \times 10^{-4}$
 $E = \frac{1}{4\pi\epsilon_0} \frac{q}{r^2}$
 $E = \frac{1}{4\pi \times 9 \times 10^9} \frac{1.56 \times 10^{-4}}{30^2}$
 $E = \frac{1.56 \times 10^{-4}}{3600 \times 36 \times 10^9}$
 $E = \frac{1.56}{129600 \times 10^5}$
 $E = \frac{1.56}{1.296 \times 10^{10}}$
 $E = 1.2 \times 10^{-10}$

- (1) 480 N/C
- (2) 240 N/C
- (3) 360 N/C
- (4) 420 N/C

32. An observer looks at a distant tree of height $10\ \text{m}$ with a telescope of magnifying power of 20 . To the observer the tree appears :

- (1) 20 times nearer.
- (2) 10 times taller.
- (3) 10 times nearer.
- (4) 20 times taller.

33. Hysteresis loops for two magnetic materials A and B are given below :



These materials are used to make magnets for electric generators, transformer core and electromagnet core. Then it is proper to use :

- (1) B for electromagnets and transformers.
- (2) A for electric generators and transformers.
- (3) A for electromagnets and B for electric generators.

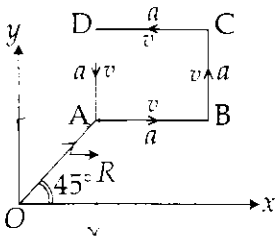
(4) A for transformers and B for electric generators.
www.MathsBySuhag.com
Ph : (0755)-32 00 000
www.IITKClasses.com

34. Half-lives of two radioactive elements A and B are 20 minutes and 40 minutes, respectively. Initially, the samples have equal number of nuclei. After 80 minutes, the ratio of decayed numbers of A and B nuclei will be :

- (1) 5 : 4
- (2) 1 : 16
- (3) 4 : 1
- (4) 1 : 4

$(\frac{1}{2})^2 = \frac{1}{4}$
 $(\frac{1}{2})^2 = \frac{1}{4}$
 $(\frac{1}{2})^2 = \frac{1}{4}$

35. A particle of mass m is moving along the side of a square of side ' a ', with a uniform speed v in the x - y plane as shown in the figure :



www.MathsBySuhag.com
 Ph (0755)-32 00 000
 www.TekoClasses.com

Which of the following statements is false for the angular momentum \vec{L} about the origin ?

(1) $\vec{L} = \frac{mv}{\sqrt{2}} R \hat{k}$ when the particle is moving from D to A .

(2) $\vec{L} = -\frac{mv}{\sqrt{2}} R \hat{k}$ when the particle is moving from A to B .

(3) $\vec{L} = mv \left[\frac{R}{\sqrt{2}} - a \right] \hat{k}$ when the particle is moving from C to D .

(4) $\vec{L} = mv \left[\frac{R}{\sqrt{2}} + a \right] \hat{k}$ when the particle is moving from B to C .

36. Choose the correct statement :

(1) In frequency modulation the amplitude of the high frequency carrier wave is made to vary in proportion to the frequency of the audio signal.

(2) In amplitude modulation the amplitude of the high frequency carrier wave is made to vary in proportion to the amplitude of the audio signal.

(3) In amplitude modulation the frequency of the high frequency carrier wave is made to vary in proportion to the amplitude of the audio signal.

(4) In frequency modulation the amplitude of the high frequency carrier wave is made to vary in proportion to the amplitude of the audio signal.

37. In an experiment for determination of refractive index of glass of a prism by $i - \delta$ plot, it was found that a ray incident at angle 35° , suffers a deviation of 40° and that it emerges at angle 79° . In that case which of the following is closest to the maximum possible value of the refractive index ?

- (1) 1.8
 (2) 1.5
 (3) 1.6
 (4) 1.7

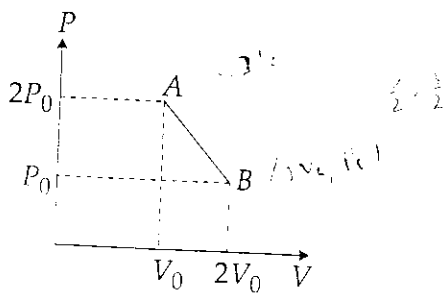
$i = 35^\circ$
 $\delta = 40^\circ$
 $e = 79^\circ$
 $40 = 79 - i$
 $i = 39$

$\mu = \frac{\sin(i)}{\sin(r)}$
 $\mu = \frac{\sin(35)}{\sin(12.5)}$

$\mu = \frac{\sin(35)}{\sin(12.5)}$

$\mu = \frac{\sin(35)}{\sin(12.5)}$

38. 'n' moles of an ideal gas undergoes a process A → B as shown in the figure. The maximum temperature of the gas during the process will be:



- (1) $\frac{9 P_0 V_0}{nR}$
 (2) $\frac{9 P_0 V_0}{4nR}$
 (3) $\frac{3 P_0 V_0}{2nR}$
 (4) $\frac{9 P_0 V_0}{2nR}$
- Handwritten notes for Q38:
 $(P \rightarrow P_0) = (V \rightarrow V_0) \frac{P_0}{V_0}$
 $P V_0 = 2 P_0 V_0 = P_0 V_0 + P_0 V_0$
 $n R T_0 = P_0 V_0 + 3 P_0 V_0$
 $2 P_0 V_0 + 3 P_0 V_0 = \frac{3 V_0 P_0}{2}$

39. Two identical wires A and B, each of length 'l', carry the same current I. Wire A is bent into a circle of radius R and wire B is bent to form a square of side 'a'. If B_A and B_B are the values of magnetic field at the centres of the circle and square respectively, then the ratio $\frac{B_A}{B_B}$ is:

- (1) $\frac{\pi^2}{8\sqrt{2}}$
 (2) $\frac{\pi^2}{8}$
 (3) $\frac{\pi^2}{16\sqrt{2}}$
 (4) $\frac{\pi^2}{16}$
- Handwritten notes for Q39:
 Diagram of a circle with radius R and a square with side a.
 $B_A = \frac{\mu_0 I}{4R}$
 $B_B = \frac{\mu_0 I}{4a}$
 Ratio $\frac{B_A}{B_B} = \frac{a}{R}$
 For circle, $2\pi R = l \Rightarrow R = \frac{l}{2\pi}$
 For square, $4a = l \Rightarrow a = \frac{l}{4}$
 Ratio $\frac{B_A}{B_B} = \frac{l/4}{l/(2\pi)} = \frac{\pi}{2}$

40. A screw gauge with a pitch of 0.5 mm and a circular scale with 50 divisions is used to measure the thickness of a thin sheet of Aluminium. Before starting the measurement, it is found that when the two jaws of the screw gauge are brought in contact, the 45th division coincides with the main scale line and that the zero of the main scale is barely visible. What is the thickness of the sheet if the main scale reading is 0.5 mm and the 25th division coincides with the main scale line?

- (1) 0.50 mm
 (2) 0.75 mm
 (3) 0.80 mm
 (4) 0.70 mm

41. For a common emitter configuration, if α and β have their usual meanings, the incorrect relationship between α and β is:

- (1) $\alpha = \frac{\beta^2}{1 + \beta^2}$
 (2) $\frac{1}{\alpha} = \frac{1}{\beta} + 1$
 (3) $\alpha = \frac{\beta}{1 - \beta}$
 (4) $\alpha = \frac{\beta}{1 + \beta}$
- Handwritten notes for Q41:
 $\alpha = \frac{\beta}{1 + \beta}$
 $\frac{1}{\alpha} = \frac{1 + \beta}{\beta} = \frac{1}{\beta} + 1$

Handwritten rough work for Q39:
 $B_A = \frac{\mu_0 I}{4R}$
 $B_B = \frac{\mu_0 I}{4a}$
 $\frac{B_A}{B_B} = \frac{a}{R}$
 $R = \frac{l}{2\pi}$
 $a = \frac{l}{4}$
 $\frac{B_A}{B_B} = \frac{l/4}{l/(2\pi)} = \frac{\pi}{2}$

www.mathsBVSuhag.com
 Ph: (0155)-32 00 000
 www.tenoclasses.com

42. The box of a pin hole camera, of length L , has a hole of radius a . It is assumed that when the hole is illuminated by a parallel beam of light of wavelength λ the spread of the spot (obtained on the opposite wall of the camera) is the sum of its geometrical spread and the spread due to diffraction. The spot would then have its minimum size (say b_{\min}) when :

(1) $a = \frac{\lambda^2}{L}$ and $b_{\min} = \sqrt{4\lambda L}$

(2) $a = \frac{\lambda^2}{L}$ and $b_{\min} = \left(\frac{2\lambda^2}{L}\right)$

(3) $a = \sqrt{\lambda L}$ and $b_{\min} = \left(\frac{2\lambda^2}{L}\right)$

(4) $a = \sqrt{\lambda L}$ and $b_{\min} = \sqrt{4\lambda L}$

43. A person trying to lose weight by burning fat lifts a mass of 10 kg upto a height of 1 m 1000 times. Assume that the potential energy lost each time he lowers the mass is dissipated. How much fat will he use up considering the work done only when the weight is lifted up ? Fat supplies 3.8×10^7 J of energy per kg which is converted to mechanical energy with a 20% efficiency rate. Take $g = 9.8 \text{ ms}^{-2}$:

(1) $12.89 \times 10^{-3} \text{ kg}$

(2) $2.45 \times 10^{-3} \text{ kg}$

(3) $6.45 \times 10^{-3} \text{ kg}$

(4) $9.89 \times 10^{-3} \text{ kg}$

$\frac{10 \times 1 \times 1000}{100} \times 3.8 \times 10^7$
 $\frac{10^4}{100} \times 3.8 \times 10^7$
 $10^2 \times 3.8 \times 10^5$
 3.8×10^7

44. Arrange the following electromagnetic radiations per quantum in the order of increasing energy :

- A : Blue light B : Yellow light
 C : X-ray D : Radiowave.

(1) B, A, D, C

(2) D, B, A, C

(3) A, B, D, C

(4) C, A, B, D

www.MathsBySuhag.com
 Ph : (0755)-32 00 000
 www.fekoClasses.com

U
I
B
A
C

45. An ideal gas undergoes a quasi static, reversible process in which its molar heat capacity C remains constant. If during this process the relation of pressure P and volume V is given by $PV^n = \text{constant}$, then n is given by (Here C_p and C_v are molar specific heat at constant pressure and constant volume, respectively) :

(1) $n = \frac{C - C_v}{C - C_p}$

(2) $n = \frac{C_p}{C_v}$

(3) $n = \frac{C - C_p}{C - C_v}$

(4) $n = \frac{C_p - C}{C - C_v}$

$\frac{20}{100} \times 3.8 \times 10^7$
 2×10^3
 1.9×10^{-3}

46. A satellite is revolving in a circular orbit at a height 'h' from the earth's surface (radius of earth R ; $h \ll R$). The minimum increase in its orbital velocity required, so that the satellite could escape from the earth's gravitational field, is close to : (Neglect the effect of atmosphere.)

(1) $\sqrt{gR} (\sqrt{2} - 1)$

(2) $\sqrt{2gR}$

(3) \sqrt{gR}

(4) $\sqrt{gR/2}$

$\left(\sqrt{1 - \frac{3\lambda}{4}} \right)^{1/2}$
 $\frac{GM}{r^2} = \frac{v^2}{r}$
 $\frac{GM}{R^2} = \frac{v^2}{R}$

48. Radiation of wavelength λ , is incident on a photocell. The fastest emitted electron has speed v . If the wavelength is changed to $\frac{3\lambda}{4}$, the speed of the fastest emitted electron will be :

(1) $= v \left(\frac{3}{4} \right)^2$

(2) $> v \left(\frac{4}{3} \right)^2$

(3) $< v \left(\frac{4}{3} \right)^2$

(4) $= v \left(\frac{4}{3} \right)^2$

$\frac{hc}{\lambda} = \phi + \frac{1}{2}mv^2$
 $\frac{4hc}{3\lambda} = \phi + \frac{1}{2}mv'^2$

47. A galvanometer having a coil resistance of 100Ω gives a full scale deflection, when a current of 1 mA is passed through it. The value of the resistance, which can convert this galvanometer into ammeter giving a full scale deflection for a current of 10 A , is :

(1) 3Ω

(2) 0.01Ω

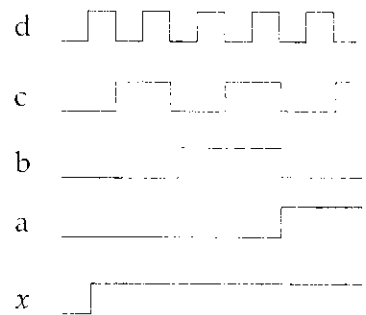
(3) 2Ω

(4) 0.1Ω

www.MathsBySuhag.com
 Ph. : (0755)-32 00 000
 www.TekoClasses.com

$\frac{10}{1000} = \frac{R_g}{R_g + R_s}$
 $10 = \frac{100R_g}{R_g + R_s}$
 $10(R_g + R_s) = 100R_g$
 $10R_g + 10R_s = 100R_g$
 $10R_s = 90R_g$
 $R_s = 9R_g = 900 \Omega$

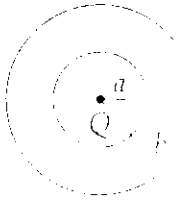
49. If a, b, c, d are inputs to a gate and x is its output, then, as per the following time graph, the gate is :



- (1) NAND
- (2) NOT
- (3) AND
- (4) OR

www.MathsBySuhag.com
 Ph. : (0755)-32 00 000
 www.TekoClasses.com

50. The region between two concentric spheres of radii 'a' and 'b', respectively (see figure), has volume charge density $\rho = \frac{A}{r}$, where A is a constant and r is the distance from the centre. At the centre of the spheres is a point charge Q. The value of A such that the electric field in the region between the spheres will be constant, is :



- (1) $\frac{2Q}{\pi a^2}$
 (2) $\frac{Q}{2\pi a^2}$
 (3) $\frac{Q}{2\pi(b^2 - a^2)}$
 (4) $\frac{2Q}{\pi(a^2 - b^2)}$


51. A student measures the time period of 100 oscillations of a simple pendulum four times. The data set is 90 s, 91 s, 95 s and 92 s. If the minimum division in the measuring clock is 1 s, then the reported mean time should be :

- (1) 92 ± 3 s
 (2) 92 ± 2 s
 (3) 92 ± 5.0 s
 (4) 92 ± 1.8 s

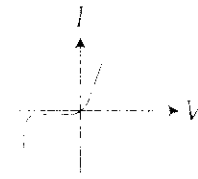
52. The temperature dependence of resistances of Cu and undoped Si in the temperature range 300-400 K, is best described by :

- (1) Linear decrease for Cu, linear decrease for Si.
 (2) Linear increase for Cu, linear increase for Si.
 (3) Linear increase for Cu, exponential increase for Si.
 (4) Linear increase for Cu, exponential decrease for Si.

53. Identify the semiconductor devices whose characteristics are given below, in the order (a), (b), (c), (d) :



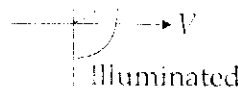
(a)



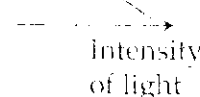
(b)

I_{dark}

Resistance



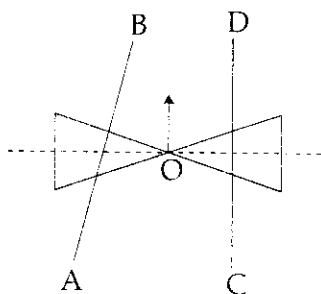
(c)



(d)

- (1) Zener diode, Solar cell, Simple diode, Light dependent resistance
 (2) Simple diode, Zener diode, Solar cell, Light dependent resistance
 (3) Zener diode, Simple diode, Light dependent resistance, Solar cell
 (4) Solar cell, Light dependent resistance, Zener diode, Simple diode

54. A roller is made by joining together two cones at their vertices O. It is kept on two rails AB and CD which are placed asymmetrically (see figure), with its axis perpendicular to CD and its centre O at the centre of line joining AB and CD (see figure). It is given a light push so that it starts rolling with its centre O moving parallel to CD in the direction shown. As it moves, the roller will tend to :



- (1) turn left and right alternately.
- (2) turn left.
- (3) turn right.
- (4) go straight.

www.MathsBySuhag.com
 Ph. : (0755)-32 00 000
www.TekoClasses.com

55. A pendulum clock loses 12 s a day if the temperature is 40°C and gains 4 s a day if the temperature is 20°C . The temperature at which the clock will show correct time, and the co-efficient of linear expansion (α) of the metal of the pendulum shaft are respectively :

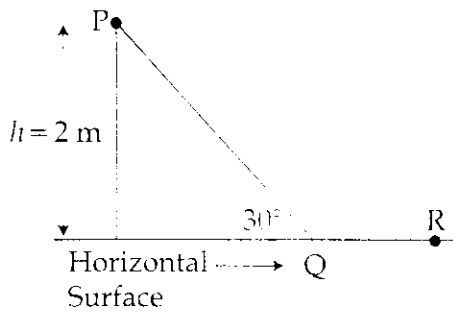
- (1) 55°C ; $\alpha = 1.85 \times 10^{-2}/^{\circ}\text{C}$
- (2) 25°C ; $\alpha = 1.85 \times 10^{-5}/^{\circ}\text{C}$
- (3) 60°C ; $\alpha = 1.85 \times 10^{-4}/^{\circ}\text{C}$
- (4) 30°C ; $\alpha = 1.85 \times 10^{-3}/^{\circ}\text{C}$

56. A uniform string of length 20 m is suspended from a rigid support. A short wave pulse is introduced at its lowest end. It starts moving up the string. The time taken to reach the support is :
(take $g = 10 \text{ ms}^{-2}$)

- (1) $\sqrt{2} \text{ s}$
- (2) $2\pi\sqrt{2} \text{ s}$
- (3) 2 s
- (4) $2\sqrt{2} \text{ s}$

57. A point particle of mass m moves along the uniformly rough track PQR as shown in the figure. The coefficient of friction, between the particle and the rough track equals μ . The particle is released, from rest, from the point P and it comes to rest at a point R. The energies, lost by the ball, over the parts, PQ and QR, of the track, are equal to each other, and no energy is lost when particle changes direction from PQ to QR.

The values of the coefficient of friction μ and the distance $x(=QR)$, are, respectively close to :



- (1) 0.29 and 6.5 m
 (2) 0.2 and 6.5 m
 (3) 0.2 and 3.5 m
 (4) 0.29 and 3.5 m

www.MathsBySuhag.com
 Ph : (0755)-32 00 000
www.TekoClasses.com

58. A pipe open at both ends has a fundamental frequency f in air. The pipe is dipped vertically in water so that half of it is in water. The fundamental frequency of the air column is now :

- (1) f
 (2) $\frac{f}{2}$
 (3) $\frac{3f}{4}$
 (4) $2f$
- $v = \frac{\lambda f}{\lambda}$

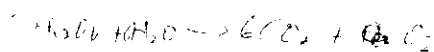
59. A particle performs simple harmonic motion with amplitude A . Its speed is trebled at the instant that it is at a distance $\frac{2A}{3}$ from equilibrium position. The new amplitude of the motion is :

- (1) $\frac{7A}{3}$
 (2) $\frac{A}{3}\sqrt{41}$
 (3) $3A$
 (4) $A\sqrt{3}$

60. An arc lamp requires a direct current of 10 A at 80 V to function. If it is connected to a 220 V (rms), 50 Hz AC supply, the series inductor needed for it to work is close to :

- (1) 0.065 H
 (2) 80 H
 (3) 0.08 H
 (4) 0.044 H

PART C – CHEMISTRY



61. Which one of the following statements about water is FALSE ?

- (1) Ice formed by heavy water sinks in normal water.
- (2) Water is oxidized to oxygen during photosynthesis.
- (3) Water can act both as an acid and as a base.
- (4) There is extensive intramolecular hydrogen bonding in the condensed phase.

62. The concentration of fluoride, lead, nitrate and iron in a water sample from an underground lake was found to be 1000 ppb, 40 ppb, 100 ppm and 0.2 ppm, respectively. This water is unsuitable for drinking due to high concentration of :

- (1) Iron
- (2) Fluoride
- (3) Lead
- (4) Nitrate

63. Galvanization is applying a coating of :

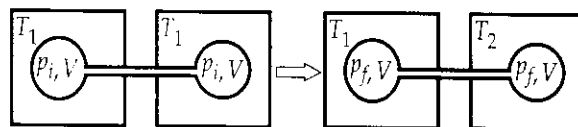
- (1) Zn
- (2) Pb
- (3) Cr
- (4) Cu

64. Which one of the following complexes shows optical isomerism ?

- (1) $[Co(NH_3)_4Cl_2]Cl$
 - (2) $[Co(NH_3)_3Cl_3]$
 - (3) $cis[Co(en)_2Cl_2]Cl$
 - (4) $trans[Co(en)_2Cl_2]Cl$
- (en = ethylenediamine)

www.MathsBVSuhag.com
 P. : (0255)-32 00 000
 www.TekoClasses.com

65. Two closed bulbs of equal volume (V) containing an ideal gas initially at pressure p_i and temperature T_1 are connected through a narrow tube of negligible volume as shown in the figure below. The temperature of one of the bulbs is then raised to T_2 . The final pressure p_f is :



- (1) $2p_i \left(\frac{T_1 T_2}{T_1 + T_2} \right)$
- (2) $p_i \left(\frac{T_1 T_2}{T_1 + T_2} \right)$
- (3) $2p_i \left(\frac{T_1}{T_1 + T_2} \right)$
- (4) $2p_i \left(\frac{T_2}{T_1 + T_2} \right)$

$p_i V = nRT$
 $2nRT_1 = \frac{2p_i V}{V}$
 $2p_i V = \frac{p_i V}{RT_1} + \frac{p_i V}{RT_2}$
 $2p_i = \frac{p_i}{T_1} + \frac{p_i}{T_2}$
 $\frac{2p_i \times T_1 T_2}{T_1 T_2} = \frac{p_i T_2 + p_i T_1}{T_1 T_2}$

$2C + O_2 \rightarrow 2CO$
 $2CO + O_2 \rightarrow 2CO_2$
 $3C + 3O_2 \rightarrow 3CO_2$
 $C + \frac{1}{2}O_2 \rightarrow CO$

66. The heats of combustion of carbon and carbon monoxide are -393.5 and -283.5 kJ mol⁻¹, respectively. The heat of formation (in kJ) of carbon monoxide per mole is :

- (1) -110.5 $C + \frac{1}{2}O_2 \rightarrow CO$
 (2) 110.5
 (3) 676.5 $C + O_2 \rightarrow CO_2$
 (4) -676.5 $2C + O_2 \rightarrow 2CO$

67. At 300 K and 1 atm, 15 mL of a gaseous hydrocarbon requires 375 mL air containing 20% O₂ by volume for complete combustion. After combustion the gases occupy 330 mL. Assuming that the water formed is in liquid form and the volumes were measured at the same temperature and pressure, the formula of the hydrocarbon is :

- (1) C₄H₁₀
 (2) C₃H₆
 (3) C₃H₈
 (4) C₄H₈

68. Decomposition of H₂O₂ follows a first order reaction. In fifty minutes the concentration of H₂O₂ decreases from 0.5 to 0.125 M in one such decomposition. When the concentration of H₂O₂ reaches 0.05 M, the rate of formation of O₂ will be :

- (1) 1.34×10^{-2} mol min⁻¹
 (2) 6.93×10^{-2} mol min⁻¹
 (3) 6.93×10^{-4} mol min⁻¹
 (4) 2.66 L min⁻¹ at STP

69. The pair having the same magnetic moment is :

[At. No.: Cr=24, Mn=25, Fe=26, Co=27]

- (1) [CoCl₄]²⁻ and [Fe(H₂O)₆]²⁺
 (2) [Cr(H₂O)₆]²⁺ and [CoCl₄]²⁻
 (3) [Cr(H₂O)₆]²⁺ and [Fe(H₂O)₆]²⁺
 (4) [Mn(H₂O)₆]²⁺ and [Cr(H₂O)₆]²⁺

70. The species in which the N atom is in a state of sp hybridization is :

- (1) NO₂
 (2) NO₂⁺
 (3) NO₂⁻
 (4) NO₃⁻

71. Thiol group is present in :

- (1) Methionine
 (2) Cytosine
 (3) Cystine
 (4) Cysteine

72. The pair in which phosphorous atoms have a formal oxidation state of +3 is :

- (1) Pyrophosphorous and pyrophosphoric acids
 (2) Orthophosphorous and pyrophosphorous acids
 (3) Pyrophosphorous and hypophosphoric acids
 (4) Orthophosphorous and hypophosphoric acids

www.MathsBySuhag.com
 Ph. : (0755)-32-00 000
 www.TekoClasses.com

2.77×10^{-2}

73. The distillation technique most suited for separating glycerol from spent-lye in the soap industry is:
- (1) Distillation under reduced pressure
 - (2) Simple distillation
 - (3) Fractional distillation
 - (4) Steam distillation

74. Which one of the following ores is best concentrated by froth floatation method?
- (1) Malachite
 - (2) Magnetite
 - (3) Siderite
 - (4) Galena

75. Which of the following atoms has the highest first ionization energy?
- (1) Sc $3d^1$
 - (2) Rb
 - (3) Na
 - (4) K

76. In the Hofmann bromamide degradation reaction, the number of moles of NaOH and Br₂ used per mole of amine produced are:
- (1) Four moles of NaOH and one mole of Br₂
 - (2) One mole of NaOH and one mole of Br₂
 - (3) Four moles of NaOH and two moles of Br₂
 - (4) Two moles of NaOH and two moles of Br₂

77. Which of the following compounds is metallic and ferromagnetic?
- (1) MnO₂
 - (2) TiO₂
 - (3) CrO₂
 - (4) VO₂

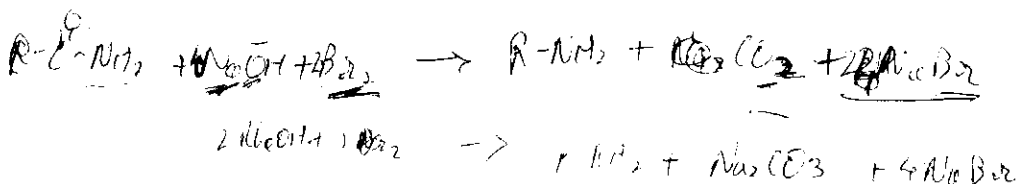
78. Which of the following statements about low density polythene is FALSE?
- (1) It is used in the manufacture of buckets, dust-bins etc.
 - (2) Its synthesis requires high pressure.
 - (3) It is a poor conductor of electricity.
 - (4) Its synthesis requires dioxygen or a peroxide initiator as a catalyst.

www.MathsBySuhag.com
Ph: (80/55)-32 00 000
www.TekoClasses.com

2-chloro-2-methylpentane on reaction with sodium methoxide in methanol yields:

- (a) $C_2H_5CH_2C(CH_3)_2OCH_3$
- (b) $C_2H_5CH_2C(CH_3)=CH_2$
- (c) $C_2H_5CH=C(CH_3)_2$

- (1) (a) and (b)
- (2) All of these
- (3) (a) and (c)
- (4) (c) only



80. A stream of electrons from a heated filament was passed between two charged plates kept at a potential difference V esu. If e and m are charge and mass of an electron, respectively, then the value of h/λ (where λ is wavelength associated with electron wave) is given by :

(1) $\sqrt{2meV}$

(2) meV

(3) $2meV$

(4) \sqrt{meV}

$eV = \frac{1}{2}mv^2$
 $\sqrt{2meV}$

81. 18 g glucose ($C_6H_{12}O_6$) is added to 178.2 g water. The vapor pressure of water (in torr) for this aqueous solution is :

(1) 759.0

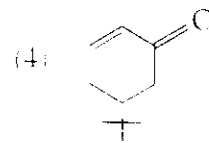
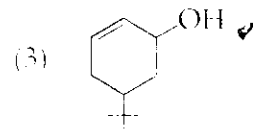
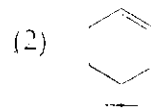
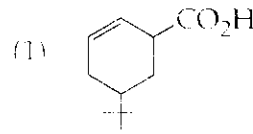
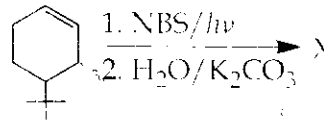
(2) 7.6

(3) 76.0

(4) 752.4

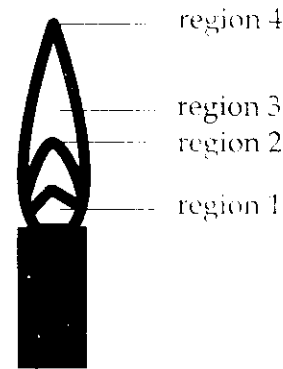
$\frac{P_0 - P}{P_0} = \frac{n_2}{n_1 + n_2}$
 $\frac{P_0 - P}{760} = \frac{18}{180 + 180}$
 $\frac{P_0 - P}{760} = \frac{1}{20}$
 $P_0 - P = 38$
 $760 - P = 38$
 $P = 722$

82. The product of the reaction given below is :



www.MathsBySuhag.com
 Ph. : (0755)-32 00 000
 www.TekoClasses.com

83. The hottest region of Bunsen flame shown in the figure below is :



(1) region 4

(2) region 1

(3) region 2

(4) region 3

$760 \times \frac{18}{180}$
 $760 \times \frac{1}{10}$
 76
 $760 - 76$
 684

84. The reaction of zinc with dilute and concentrated nitric acid, respectively, produces :

- (1) NO_2 and N_2O
 (2) N_2O and NO_2
 (3) NO_2 and NO
 (4) NO and N_2O

85. Which of the following is an anionic detergent ?

- (1) Glyceryl oleate
 (2) Sodium stearate
 (3) Sodium lauryl sulphate
 (4) Cetyltrimethyl ammonium bromide

86. The reaction of propene with HOCl ($\text{Cl}_2 + \text{H}_2\text{O}$) proceeds through the intermediate :

- (1) $\text{CH}_3\text{-CHCl-CH}_2^+$
 (2) $\text{CH}_3\text{-CH}^+\text{-CH}_2\text{-OH}$
 (3) $\text{CH}_3\text{-CH}^+\text{-CH}_2\text{-Cl}$
 (4) $\text{CH}_3\text{-CH(OH)-CH}_2^+$

87. For a linear plot of $\log(x/m)$ versus $\log p$ in a Freundlich adsorption isotherm, which of the following statements is correct? (k and n are constants)

- (1) $\log(1/n)$ appears as the intercept.
 (2) Both k and $1/n$ appear in the slope term.
 (3) $1/n$ appears as the intercept.
 (4) Only $1/n$ appears as the slope.

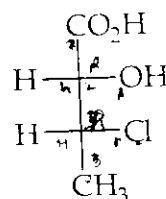
88. The main oxides formed on combustion of Li, Na and K in excess of air are, respectively :

- (1) Li_2O , Na_2O_2 and KO_2
 (2) Li_2O , Na_2O and KO_2
 (3) LiO_2 , Na_2O_2 and K_2O
 (4) Li_2O_2 , Na_2O_2 and KO_2

89. The equilibrium constant at 298 K for a reaction $A + B \rightleftharpoons C + D$ is 100. If the initial concentration of all the four species were 1 M each, then equilibrium concentration of D (in mol L^{-1}) will be :

- (1) 1.182
 (2) 0.182
 (3) 0.818
 (4) 1.818

90. The absolute configuration of



is :

- (1) (2R, 3R)
 (2) (2R, 3S)
 (3) (2S, 3R)
 (4) (2S, 3S)

www.MathsBySuhag.com
 Ph. : (0755)-32 00 000
 www.TekoClasses.com

32

BOOST YOUR RANK

Short Tricks in Maths

JEE (Main / Advanced) 2016

Live / Video / Online Available

Batch I : 15th March to 19th May Daily 3 hrs. Fee 1000/-

Batch II : 22nd March to 19th May Daily 3 hrs. Fee 1000/-

Batch III : 30th March & 1st April Daily 8 Hrs. Fee 100/- per day

Batch IV : 12th April to 19th May Daily 3 hrs. Fee 1000/-

Batch V : 28th April to 19th May Daily 3 hrs. Fee 1000/-

ADMISSION OPEN IN REGULAR BATCHES

KOLAR CENTER :

Reg. FREE Yourself On Phone (0755) 32 00 00 0 And Get

Two Months Starting Classes FREE in class 11th and 12th Maths By Suhag

Class 12th Mon. Wed. Fri. 6 pm to 8 pm from 4th March Fri.

Class 11th Mon. Wed. Fri. 4 pm to 6 pm from 4th April Mon.

More Practice in Classroom, Less Homework |

Separate Batches for Medium English / मिडियम इंग्लिश | Hostel Facility Available | School Facility Available

Get Scholarship on Marks Scored by you in Previous Exams

Suhag Kariya (Maths)

Chitranjan (Physics)

Pavan Gubrele, Neeraj Sharma

Siddharth Sahu (Chemistry)

Individual Subjects Available

TEKO[®]

CLASSES

☎ : (0755) 32 00 000, 903 903 777 9, 98930 58881

• 27, III-Floor, Near Patidar Studio, Above Bond Classes, **Zone-2, M.P. Nagar, Bhopal**

• II-Floor, Windsor Square, Opp. Vishal Mega Mart, Main Road Kolar, Bhopal

MOCK TEST JEE 2016

Fee FREE Registration on
Phone (0755) 32 00 000

For JEE Main Only One Test on

28 March 2016 Sunday 2 pm to 5 pm

For JEE Advanced there are 4 Test at
9 am to 12 noon & 2 pm to 5 pm on

• 29th April 2016 Friday • 6th May 2016 Friday

• 13th May 2016 Friday • 20th May 2016 Friday

Overall Average Topper will get latest TABLET

M. P. NAGAR CENTER :

Reg. Fee Rs. 500/- and Get Ten Days Starting Classes as Demo.

Class 12th Tue. Thu. Sat. 4 pm to 6 pm from 3rd March Thu.

Class 11th Tue. Thu. Sat. 6 pm to 8 pm from 5th April Tue.

Class 10th Maths Free Year Long By Suhag Sir Every Sunday 4 hrs.

Dropper Batch Tue. Thu. Sat. 12:45 pm to 3:45 pm from 3rd May Tue.

Every Sunday Test, Solutions, Discussion

Read the following instructions carefully :

1. The candidates should fill in the required particulars on the Test Booklet and Answer Sheet (*Side-1*) with **Blue/Black Ball Point Pen**.
2. For writing/marking particulars on *Side-2* of the Answer Sheet, use **Blue/Black Ball Point Pen only**.
3. The candidates should not write their Roll Numbers anywhere else (except in the specified space) on the Test Booklet/ Answer Sheet.
4. Out of the four options given for each question, only one option is the correct answer.
5. For each **incorrect response**, **one-fourth** ($\frac{1}{4}$) of the total marks allotted to the question would be deducted from the total score. **No deduction** from the total score, however, will be made **if no response** is indicated for an item in the Answer Sheet.
6. Handle the Test Booklet and Answer Sheet with care, **as under no circumstances (except for discrepancy in Test Booklet Code and Answer Sheet Code) another set will be provided.**
7. The candidates are not allowed to do any rough work or writing work on the Answer Sheet. All calculations/writing work are to be done in the space provided for this purpose in the Test Booklet itself, marked 'Space for Rough Work'. This space is given at the bottom of each page and in **three pages (Pages 21 - 23)** at the end of the booklet.
8. On completion of the test, the candidates must hand over the Answer Sheet to the Invigilator on duty in the Room/Hall. **However, the candidates are allowed to take away this Test Booklet with them.**
9. Each candidate must show on demand his/her Admit Card to the Invigilator.
10. No candidate, without special permission of the Superintendent or Invigilator, should leave his/her seat.
11. The candidates should not leave the Examination Hall without handing over their Answer Sheet to the Invigilator on duty and sign the Attendance Sheet again. Cases where a candidate has not signed the Attendance Sheet a second time will be deemed not to have handed over the Answer Sheet and dealt with as an unfair means case. **The candidates are also required to put their left hand THUMB impression in the space provided in the Attendance Sheet.**
12. Use of Electronic/Manual Calculator and any Electronic device like mobile phone, pager etc. is prohibited.
13. The candidates are governed by all Rules and Regulations of the JAB/Board with regard to their conduct in the Examination Hall. All cases of unfair means will be dealt with as per Rules and Regulations of the JAB/Board.
14. No part of the Test Booklet and Answer Sheet shall be detached under any circumstances.
15. **Candidates are not allowed to carry any textual material, printed or written, bits of papers, pager, mobile phone, electronic device or any other material except the Admit Card inside the examination room/hall.**